



**ADRIATIC**  
COLLEGE

**Pearson: Mathematics**

**iPrimary Four  
Demo Entrance Test**

**Private International School**  
Montenegro, Budva

[adriaticcollege.com](http://adriaticcollege.com)




Name \_\_\_\_\_

(40 min)

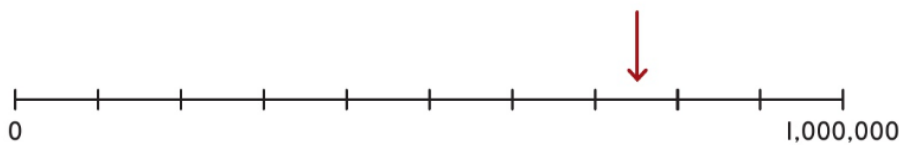
Choose the correct answers.

1. Which number is represented on the place value grid?



- A** 8,436      **B** 84,036      **C** 84,306      **D** 80,436

2. What number is the arrow pointing to?

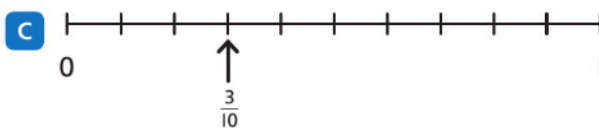



- A** 7.5      **B** 75      **C** 75,000      **D** 750,000

3. Which of these is **not** a prime number?

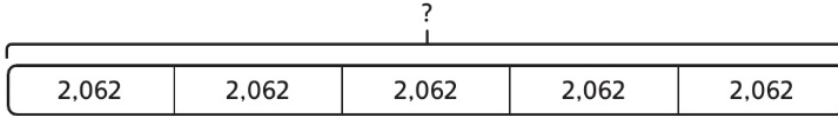
- A** 2      **B** 17      **C** 27      **D** 31

4. Which representation is not equivalent to  $\frac{10}{15}$ ?






5. What is the missing number in the bar model?



- A** 2,062      **B** 10,000      **C** 10,310      **D** 20,620

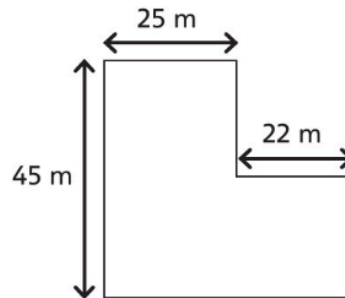
6. Which pair is represented here?



- A** 0.9 and 9%  
**B**  $\frac{9}{100}$  and 90%  
**C** 80% and  $\frac{8}{10}$   
**D** 90% and 0.9

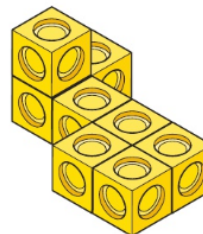
7. What is the perimeter of this field?

- A** 184 m  
**B** 92 m  
**C** 45 m  
**D** 47 m



8. What is the volume of this shape?

- A** 8 cm<sup>3</sup>  
**B** 7 cm<sup>3</sup>  
**C** 9 cm<sup>3</sup>  
**D** 17 cm<sup>3</sup>





**Private International School**  
Montenegro, Budva

[adriaticcollege.com](http://adriaticcollege.com)