



ADRIATIC
COLLEGE

Pearson: Mathematics

**iPrimary Three
Demo Entrance Test**

Private International School
Montenegro, Budva

adriaticcollege.com



Name _____

(40 min)

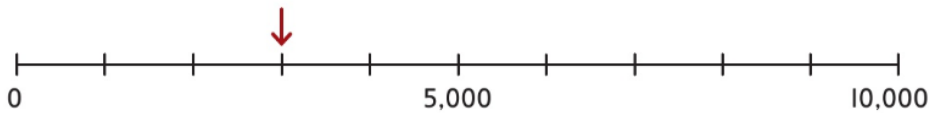
Choose the correct answers.

1. Complete the partition.

$$4,657 = 3,000 + \square + 50 + 7$$

- A** 600 **B** 1,000 **C** 1,600 **D** 4,000

2. What number is the arrow pointing to?



- A** 3 **B** 30 **C** 300 **D** 3,000

3. Which number is missing from each calculation?

$4 \times \square = 4$

$5 \times \square = 5$

$11 \div \square = 11$

- A** 0
B 1
C 10
D A different number each time.

4. Which time is not the same as the others?

A



B



C

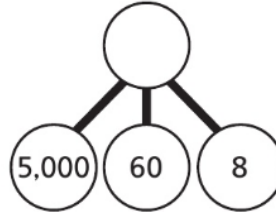


D

8 minutes to 4

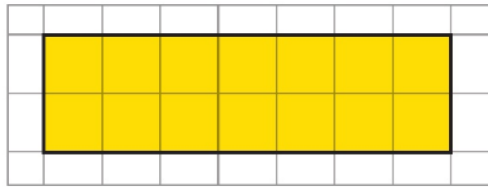
5. What number does the part-whole model show?

- A** Five hundred and sixty-eight
- B** Five thousand and sixty-eight
- C** 5,000,608
- D** 568

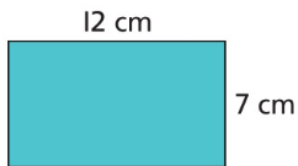


6. What is the area of the rectangle?

- A** 18 squares
- B** 7 squares
- C** 12 squares
- D** 14 squares



7. What is the perimeter of this rectangle?



- A** 48 cm
- B** 19 cm
- C** 84 cm
- D** 38 cm



Private International School
Montenegro, Budva

adriaticcollege.com